



**II. Expected Length of Answer and Time Required for Each Form of Question shall be as Follows :**

Sl. No.	Forms of Questions	Expected Length	Expected Time for Each Question	Total Number of Questions	Total Time Expected
1.	MCQ (I)	-	2 minutes	4	08 minutes
2.	MCQ (II)	-	3 minutes	2	06 minutes
3.	SA (I)	one line	3 minutes	4	12 minutes
4.	SA (II)	20-30 words	4 minutes	6	24 minutes
4.	SA (III)	30-50 words	7 minutes	9	63 minutes
6.	Assertion-Reason	-	3 minutes	2	06 minutes
7.	Long Answer Type	70-100 words	15 minutes	3	45 minutes
8.	Revision	-			16 minutes
		<b>TOTAL</b>	-	<b>30</b>	<b>180 minutes</b>

**III. Weightage to Difficulty Level of Questions**

Sl. No.	Estimated Difficulty Level of Questions	Percentage
1.	Easy	18
2.	Average	64
3.	Difficult	18

# MODEL QUESTION PAPER-I

## CHEMISTRY

### Class XII

Time : 3 Hours

Maximum Marks : 70

#### General Instructions :

- (i) All the questions are compulsory.
- (ii) Questions 1 to 4, carry one mark each and questions 5 to 6, carry 2 marks each.
- (iii) Questions 7 to 10 are short answer questions carrying 1 mark each.
- (iv) Questions 11 to 16 are short answer questions carrying 2 mark each.
- (v) Questions 17 to 25 are also short answer questions carrying 3 marks each.
- (vi) Questions 26 to 27 are assertion- reason questions carrying 2 marks each.
- (vii) Questions 28 to 30 are long answer questions carrying 5 marks each.
- (viii) Use log tables for calculations if necessary.

---

---

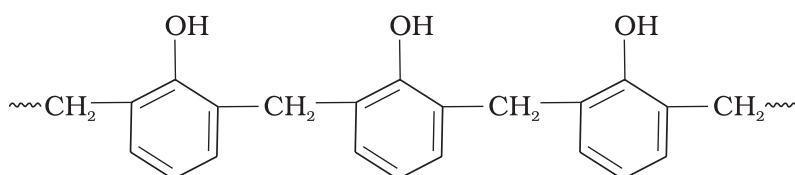
#### Note : Choose one correct option for questions 1 to 4.

1. Which of the following substance will have lowest melting point? **(1)**
  - (i) H<sub>2</sub>O (ice)
  - (ii) Quartz
  - (iii) Diamond
  - (iv) CO<sub>2</sub> (dry ice)
  
2. Which of the following reactions is an example of autoreduction? **(1)**
  - (i)  $\text{FeS} + \frac{3}{2} \text{O}_2 \longrightarrow \text{FeO} + \text{SO}_2$
  - (ii)  $\text{FeO} + \text{SiO}_2 \longrightarrow \text{FeSiO}_3$
  - (iii)  $\text{Cu}_2\text{O} + \frac{1}{2} \text{Cu}_2\text{S} \longrightarrow 3\text{Cu} + \frac{1}{2} \text{SO}_2$
  - (iv)  $\text{Cu}_2\text{S} + \frac{3}{2} \text{O}_2 \longrightarrow \text{Cu}_2\text{O} + \text{SO}_2$
  
3. In the titration of Mohr salt solution with KMnO<sub>4</sub> solution, dilute H<sub>2</sub>SO<sub>4</sub> is used to provide acidic medium. The titration gives unsatisfactory result when we use HCl in place of H<sub>2</sub>SO<sub>4</sub>. This is because. **(1)**
  - (i) MnO<sub>4</sub><sup>-</sup> oxidises HCl to Cl<sub>2</sub>.
  - (ii) HCl oxidises MnO<sub>4</sub><sup>-</sup> to Mn<sup>2+</sup>
  - (iii) HCl forms chlorocomplex with Mn<sup>2+</sup>
  - (iv) Fe<sup>2+</sup> is reduced to Fe<sup>3+</sup> in the presence of HCl
  
4. The correct IUPAC name for CH<sub>2</sub>=CHCH<sub>2</sub> NHCH<sub>3</sub> is \_\_\_\_\_. **(1)**
  - (i) Allylmethylamine

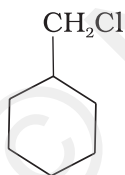
- (ii) N-methylprop-2-en-1-amine
- (iii) 4-amino-pent-1-ene
- (iv) 2-amino-4-pentene

**Note : Choose two correct options for questions 5 and 6.**

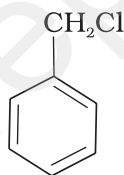
5. Conductivity of an electrolytic solution depends on \_\_\_\_\_. **(2)**
- (i) nature of electrolyte.
  - (ii) concentration of electrolyte.
  - (iii) area of cross section of the electrode.
  - (iv) distance between the electrodes.
6. Which of the following are correct statements? **(2)**
- (i) Mixing two oppositely charged sols in equal amount neutralises charges and stabilises colloid.
  - (ii) Presence of equal and similar charges on colloidal particles provides stability to the colloidal solution.
  - (iii) Any amount of dispersed liquid can be added to emulsion without destabilising it.
  - (iv) Brownian movement stabilises sols.
7. Why does prolonged dialysis destabilise the colloids? **(1)**
8. Although carbon and hydrogen are better reducing agents but they are not used to reduce metallic oxides at high temperatures. Why? **(1)**
9. Which forces impart crystalline nature to a polymer like nylon? **(1)**
10. Name an artificial sweetener which is derivative of sucrose. **(1)**
11. Explain why does conductivity of germanium crystals increases on doping with gallium. **(2)**
12. Explain why  $\text{NCl}_3$  gets easily hydrolysed but  $\text{NF}_3$  does not. **(2)**
13. Explain why  $[\text{Fe}(\text{H}_2\text{O})_6]^{3+}$  has high magnetic moment value of 5.92 BM whereas magnetic moment of  $[\text{Fe}(\text{CN})_6]^{3-}$  has value of only 1.74 BM. **(2)**
14. Why can arylhalide not be prepared by reaction of phenol with HCl in the presence of  $\text{ZnCl}_2$ ? **(2)**
15. Write the name of starting materials used for the synthesis of following polymer and identify its monomer unit. **(2)**



- 16.** How do antidepressant drugs counteract feeling of depression? **(2)**
- 17.** Components of a binary mixture of two liquids A and B were being separated by distillation. After some time separation of components stopped and composition of vapour phase became same as that of liquid phase. Both the components started coming in the distillate. Explain why this happened. **(3)**
- 18.** Identify the cathode and anode in the cell written below. **(3)**  
 $\text{Cu} \mid \text{Cu}^{2+} \parallel \text{Cl}^- \mid \text{Cl}_2, \text{Pt}$   
 Write the reduction half reaction and oxidation half reaction of the cell.
- 19.** With the help of an example explain how one can separate two sulphide ores by Froth Floatation method. **(3)**
- 20.** White phosphorus reacts with chlorine and the product gets hydrolysed in the presence of water to produce HCl. Calculate the mass of HCl obtained by the hydrolysis of the product formed by the reactions of 62 g of white phosphorus with chlorine in the presence of water. **(3)**
- 21.** A coordination compound  $\text{CrCl}_3 \cdot 4\text{H}_2\text{O}$  precipitates AgCl when treated with  $\text{AgNO}_3$ . The molar conductance of the solution of coordination compound corresponds to a total of two ions. Write structural formula of the compound and name it. **(3)**
- 22.** Which of the following compounds would undergo  $\text{S}_{\text{N}}1$  reaction faster and why? **(3)**

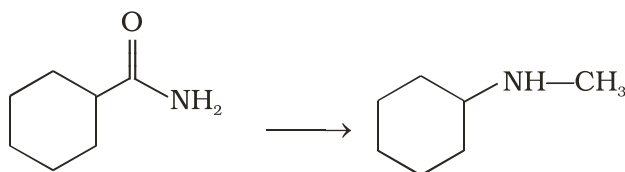


(A)

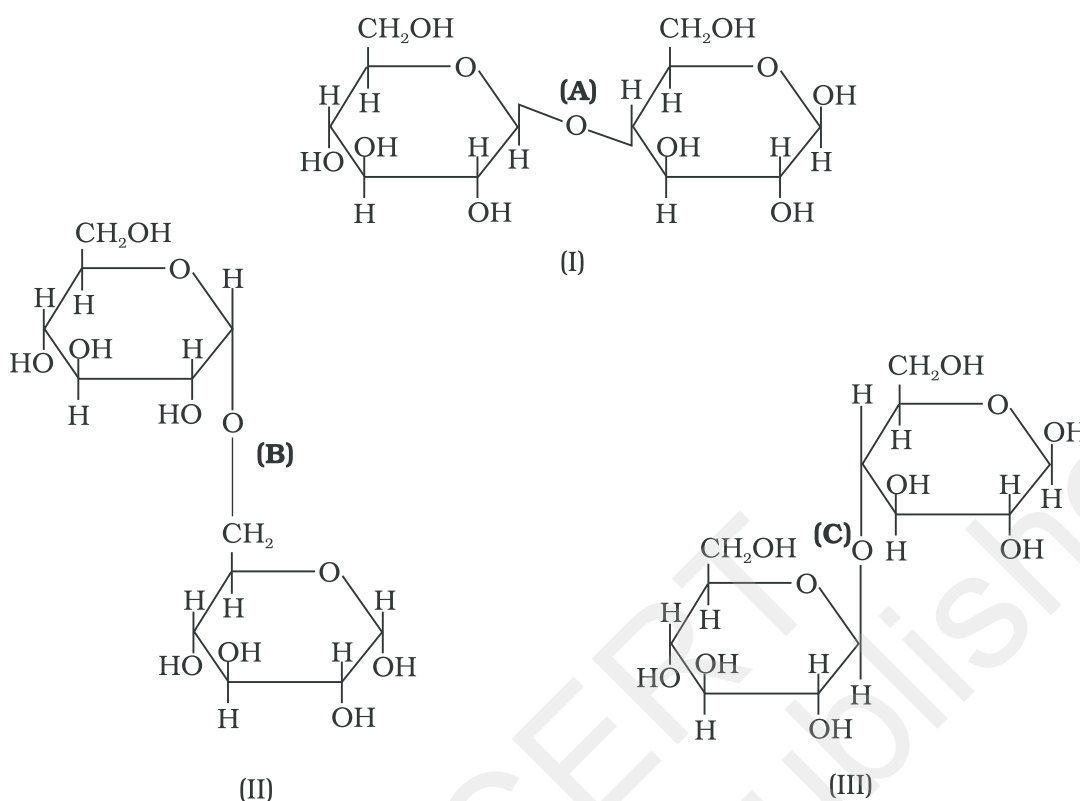


(B)

- 23.** Ethers can be prepared by Williamson synthesis in which an alkyl halide is reacted with sodium alkoxide. Explain why di-*tert*-butyl ether can't be prepared by this method. **(3)**
- 24.** Suggest a route by which the following conversion can be accomplished. **(3)**



- 25.** Three structures are given below in which two glucose units are linked. Which of these linkages between glucose units are between C1 and C4 and which linkages are between C1 and C6. Is the compound (I) reducing in nature? Explain. **(3)**



**Note :** In question 26 and 27. A statement of assertion followed by a statement of reason is given. Choose the correct option out of the options given below each equation.

**26. Assertion :** Molarity of a solution in liquid state changes with temperature.

**Reason :** The volume of a solution changes with change in temperature. (2)

- (i) Assertion and reason both are correct statements and reason is correct explanation for assertion.
- (ii) Assertion and reason both are correct statements but reason is not correct explanation for assertion.
- (iii) Assertion is correct statement but reason is wrong statement.
- (iv) Assertion and reason both are incorrect statements.
- (v) Assertion is wrong statement but reason is correct statement.

**27. Assertion :** *p*-nitrophenol is more acidic than phenol.

**Reason :** Nitro group helps in the stabilisation of the phenoxide ion by dispersal of negative charge due to resonance. (2)

- (i) Assertion and reason both are correct statements and reason is correct explanation for assertion.
- (ii) Assertion and reason both are correct statements but reason is not correct explanation for assertion.
- (iii) Assertion is correct statement but reason is wrong statement.

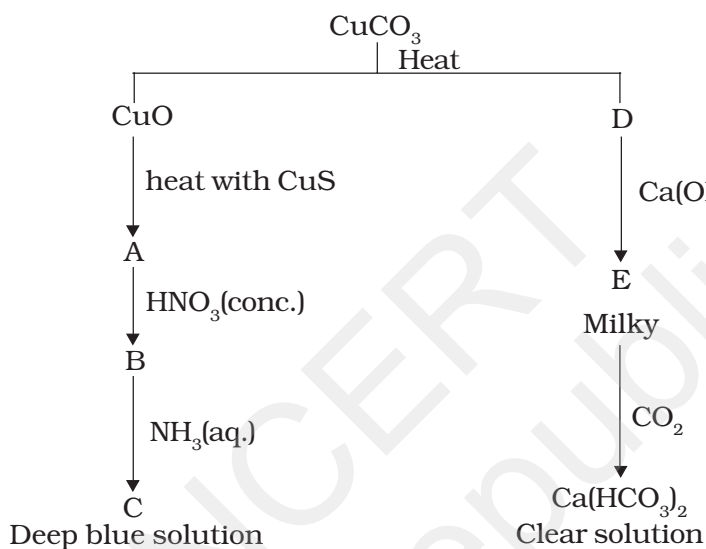
- (iv) Assertion and reason both are incorrect statements.  
 (v) Assertion is wrong statement but reason is correct statement.

**28.** How are most probable kinetic energy and the energy of activation affected with increase in temperature. **(5)**

**or**

Explain the difference between instantaneous rate of a reaction and average rate of a reaction.

**29.** Identify compounds A to E and also explain the reactions involved. **(5)**



**or**

A violet compound of manganese (A) decomposes on heating to liberate oxygen and compounds (B) and (C) of manganese are formed. Compound (C) reacts with KOH in the presence of  $\text{KNO}_3$  to give compound (B). On heating compound (C) with a mixture of conc.  $\text{H}_2\text{SO}_4$  and NaCl, chlorine gas is liberated and a compound (D) of manganese along with other products is formed. Identify compounds (A) to (D) and also explain the reaction involved.

**30.** An alkene 'A' (Molecular formula  $\text{C}_5\text{H}_{10}$ ) on ozonolysis gives a mixture of two compounds 'B' and 'C'. Compound 'B' gives positive Fehling's test and also forms iodoform on treatment with iodine and NaOH solution. Compound 'C', does not give Fehling's test but forms iodoform. Identify the compounds 'A', 'B' and 'C' giving suitable explanation and write the reactions of ozonolysis and iodoform formation from either 'B' or 'C'. **(5)**

**or**

Explain the reactivity of  $\alpha$ -hydrogen atoms in ethanal. Write the reaction when (a) a mixture of ethanal and benzaldehyde is treated with NaOH (aq) and (b) when only benzaldehyde is treated with conc. KOH solution. Write the names of reaction in both the cases.

## Guidelines for Evaluation (Marking Scheme)

- (iv) (1)
- (iii) (1)
- (i) (1)
- (ii) (1)
- (i), (ii) (2)
- (ii), (iv) (2)
- Traces of electrolytes stabilise the colloids. On prolonged dialysis electrolyte is completely removed thus making the colloids unstable. (1)
- At high temperature carbon and hydrogen react with metals to form carbides and hydrides respectively. (1)
- Strong intermolecular forces like hydrogen-bonding, lead to close packing of chains that imparts crystalline character to polymers like nylon. (1)
- Sucrose (1)
- On doping germanium with gallium some of the positions of lattice of germanium are occupied by gallium. Gallium atom has only three valence electrons. Therefore, fourth valency of nearby germanium atom is not satisfied. These places remain vacant. This place is deficient of electrons and is therefore called electron hole or electron vacancy. Electron from neighbouring atom can come and fills the gap, thereby creating a hole in its original position. Under the influence of electric field electrons move towards positively charged plates using these holes and conduct electricity. The holes appear to move towards negatively charged plates. (2)
- $\text{NCl}_3$  is unstable in comparison to  $\text{NF}_3$  because N—Cl bond is weak in comparison to N—O bond while N—F bond is strong in comparison to N—O bond. (2)
- Iron in  $[\text{Fe}(\text{CN})_6]^{3-}$  involves  $d^2sp^3$  hybridisation with one unpaired electron and iron in  $[\text{Fe}(\text{H}_2\text{O})_6]^{3+}$  involves  $sp^3d^2$  hybridisation with five unpaired electrons. This difference is due to the presence of strong ligand  $\text{CN}^-$  in  $[\text{Fe}(\text{CN})_6]^{3-}$  and weak ligand  $\text{H}_2\text{O}$  in  $[\text{Fe}(\text{H}_2\text{O})_6]^{3+}$  (2)

### Distribution of marks

- Writing hybridisation (1 mark)
  - Explanation (1 mark)
14. C—O bond in phenols is more stable due to resonance effect and it has double bond character hence breaking of this bond is difficult.

### Distribution of marks

- Writing structure of phenol and aryl halide ( $\frac{1}{2}$  mark)
- Writing resonance structure ( $\frac{1}{2}$  mark)
- Explanation (1 mark)



15. **Distribution of marks**

- Monomer Unit (1 mark)
- Starting materials phenol and formaldehyde ( $\frac{1}{2} \times 2 = 1$ )

16. Antidepressant drugs inhibit the enzyme which catalyses the degradation of noradrenaline. Thus noradrenaline which acts as a neurotransmitter is slowly metabolised and continues to activate its receptor for a longer period of time. This activation of receptor for a long time counteracts the effect of depression.

17. Since both the components are appearing in the distillate and composition of liquid and vapour is same, this shows that liquids have formed azeotropic mixture. Hence, this cannot be separated at this stage by distillation.

**Distribution of marks**

- Recognising that azeotropic mixture has formed (1 mark)
- Explanation (2 mark)

18. Anode :  $\text{Cu} \longrightarrow \text{Cu}^{2+} + 2\text{e}^-$

Cathode :  $\text{Cl}_2 + 2\text{e}^- \longrightarrow 2\text{Cl}^-$

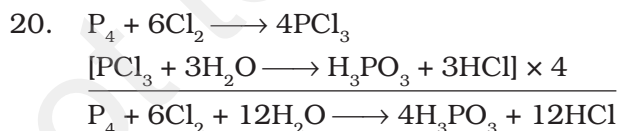
Copper is anode as it is getting oxidised

$\text{Cl}_2$  is the cathode as it is getting reduced.

**Distribution of marks**

- Anode reaction (1 mark)
- Cathode reaction (1 mark)
- Recognising electrodes on which oxidation and reduction occur ( $\frac{1}{2} + \frac{1}{2} = 1$  mark)

19. Two sulphide ores can be separated by adjusting proportion of oil to water or by using depressants. For example, in case of an ore containing ZnS and PbS, the depressant NaCN is used. It forms complex with ZnS and prevents its coming with froth, but PbS remains with froth and can be separated.



1 mol of white phosphorus produces 12 mol HCl

62g of white phosphorus has been taken which is equivalent to  $\frac{62}{124} = \frac{1}{2}$  mol.

Therefore 6 mol HCl will be formed.

6 mol HCl =  $6 \times 36.5 = 219.0$  g HCl

**Distribution of marks**

- For writing overall reaction (1 mark)
- Calculation of number of moles of HCl formed (1 mark)
- Calculation of mass of HCl formed (1 mark)

21. **Distribution of marks**

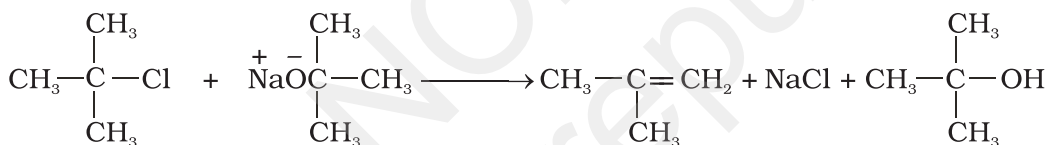
- Identification :  $[\text{Co}(\text{H}_2\text{O})_4\text{Cl}_2]\text{Cl}$  (1 mark)
- Name : Tetraaquadichlorocobalt(III)chloride (1 mark)
- Explanation (1 mark)

22. (B) Undergoes  $\text{S}_{\text{N}}1$  reaction faster than (A) because in case of (B) the carbocation formed after the loss of  $\text{Cl}^-$  ion is stabilised by resonance, whereas, no such stabilisation is possible in the carbocation obtained from (A).

**Distribution of marks**

- Resonance structures (1½ mark)
- Reason (1½ mark)

23. In tert-butyl halides, elimination is favoured over substitution therefore alkene is the only reaction product and no ether is formed.



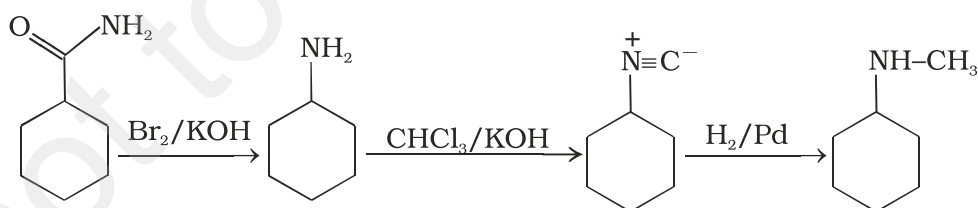
(*tert*-Butylchloride)

(2-Methylprop-1-ene)

**Distribution of marks**

- Reaction (1½ mark)
- Explanation (1½ mark)

24.

**Distribution of marks**

- One mark for each step (1 × 3 = 3 marks)

25. (A) and (C) are between C1 and C4. (B) is between C1 and C6.

**Distribution of marks**

- ½ mark for each correct identification (½ × 3 = 1½ marks)

- Yes, compound is reducing in nature (½ mark)
- Explanation (1 marks)

26. (i) (2)

27. (i) (2)

28. **Distribution of marks**

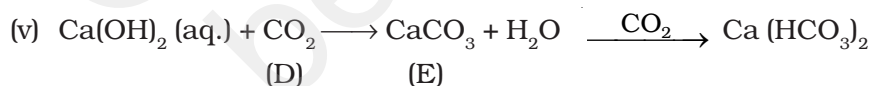
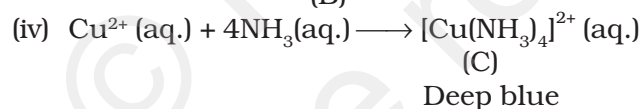
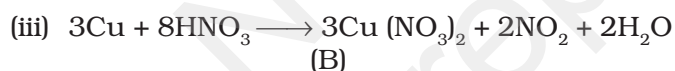
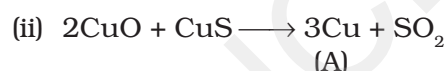
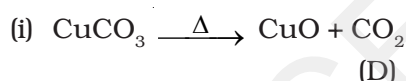
- Graph for distribution of energy (2 marks)
- Explanation (3 marks)

or

**Distribution of marks**

- Graph for instantaneous rate (1 mark)
- Graph for average rate (1 mark)
- Explanation (3 marks)

29. A = Cu      B = Cu (NO<sub>3</sub>)<sub>2</sub>      C = [Cu(NH<sub>3</sub>)<sub>4</sub>]<sup>2+</sup>      D = CO<sub>2</sub>      E = CaCO<sub>3</sub>

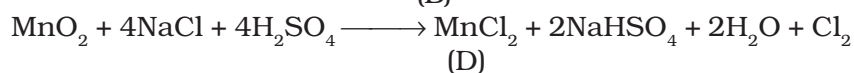

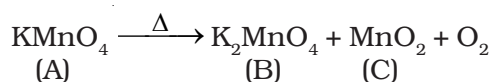


**Distribution of marks**

- Identification (5 × ½ = 2½ marks)
- Reactions (5 × ½ = 2½ marks)

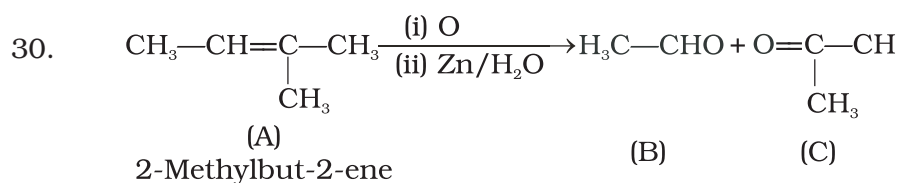
or

A = KMnO<sub>4</sub>      B = K<sub>2</sub>MnO<sub>4</sub>      C = MnO<sub>2</sub>      D = MnCl<sub>2</sub>



### Distribution of marks

- Identification (½×4 = 2 marks)
- Reactions (½×3 = 1½ marks)
- Explanation (1½ marks)

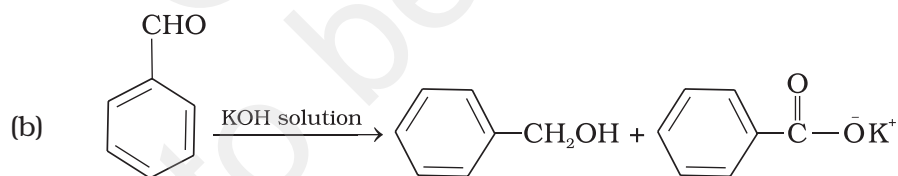
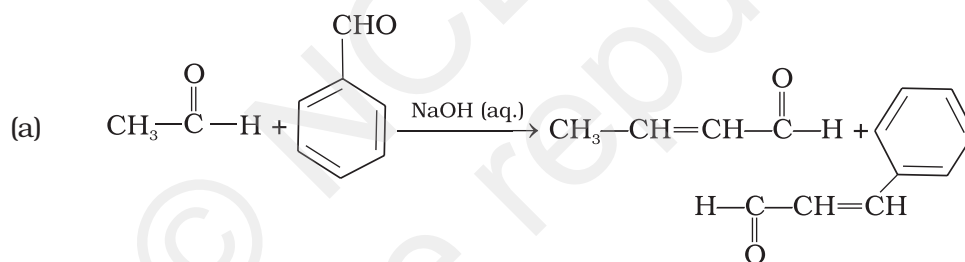


### Distribution of marks

- Identification (½ + ½ + ½ = 1½ marks)
- Reason (½ + ½ + ½ = 1½ marks)
- Reactions (2 × 1 = 2 marks)

Other isomers of 'A' will not give products corresponding to the given test.

or



- Names : (a) Aldol condensation  
(b) Cannizaro's reaction

### Distribution of marks

- Electron withdrawing effect of >C=O group (1 mark)
- For showing resonance (1 mark)
- Writing 2 products in each reaction (½ × 4 = 2 mark)
- Names of two reactions (½ × 2 = 1 mark)